



MINISTRY OF EDUCATION, SINGAPORE
in collaboration with
CAMBRIDGE ASSESSMENT INTERNATIONAL EDUCATION
General Certificate of Education Ordinary Level

CANDIDATE
NAME

Mr. Lim

CENTRE
NUMBER

S

INDEX
NUMBER

ADDITIONAL MATHEMATICS

4049/02

Paper 2

October/November 2022

2 hours 15 minutes

Candidates answer on the Question Paper.

No Additional Materials are required.

READ THESE INSTRUCTIONS FIRST

Write your Centre number, index number and name in the spaces at the top of this page.

Write in dark blue or black pen.

You may use an HB pencil for any diagrams or graphs.

Do not use staples, paper clips, glue or correction fluid.

DO **NOT** WRITE ON ANY BARCODES.

Answer **all** the questions.

Give non-exact numerical answers correct to 3 significant figures, or 1 decimal place in the case of angles in degrees, unless a different level of accuracy is specified in the question.

The use of an approved scientific calculator is expected, where appropriate.

You are reminded of the need for clear presentation in your answers.


The number of marks is given in brackets [] at the end of each question or part question.

The total number of marks for this paper is 90.



where trans**Form**Ation begins

Solution served as a suggestion only



Mathematical Formulae

1. ALGEBRA

*Quadratic Equation*For the equation $ax^2 + bx + c = 0$,

$$x = \frac{-b \pm \sqrt{b^2 - 4ac}}{2a}$$

Binomial expansion

$$(a + b)^n = a^n + \binom{n}{1}a^{n-1}b + \binom{n}{2}a^{n-2}b^2 + \dots + \binom{n}{r}a^{n-r}b^r + \dots + b^n,$$

where n is a positive integer and $\binom{n}{r} = \frac{n!}{r!(n-r)!} = \frac{n(n-1)\dots(n-r+1)}{r!}$

2. TRIGONOMETRY

Identities

$$\sin^2 A + \cos^2 A = 1$$

$$\sec^2 A = 1 + \tan^2 A$$

$$\operatorname{cosec}^2 A = 1 + \cot^2 A$$

$$\sin(A \pm B) = \sin A \cos B \pm \cos A \sin B$$

$$\cos(A \pm B) = \cos A \cos B \mp \sin A \sin B$$

$$\tan(A \pm B) = \frac{\tan A \pm \tan B}{1 \mp \tan A \tan B}$$

$$\sin 2A = 2 \sin A \cos A$$

$$\cos 2A = \cos^2 A - \sin^2 A = 2 \cos^2 A - 1 = 1 - 2 \sin^2 A$$

$$\tan 2A = \frac{2 \tan A}{1 - \tan^2 A}$$

Formulae for $\triangle ABC$

$$\frac{a}{\sin A} = \frac{b}{\sin B} = \frac{c}{\sin C}$$

$$a^2 = b^2 + c^2 - 2bc \cos A$$

$$\Delta = \frac{1}{2}bc \sin A$$



- 1 In 2010, there were an estimated 2400 birds of a particular species in a certain country. In 2013, the numbers were estimated to have fallen to 2050. Scientists believe that the number of these birds, N , can be modelled by the formula $N = 2400e^{-kt}$, where t is the time in years after 2010.

(a) Estimate the number of birds in the year 2017. [4]

$$N = 2400e^{-kt}$$

$$2050 = 2400e^{-3k}$$

$$k = 0.0525429$$

Yr 2017, $t = 7$

$$N = 2400e^{-0.0525(7)}$$

$$= 1661.41$$

$$\approx 1661 \text{ birds.}$$

- (b) The species is labelled "under threat" when the number of birds falls below 1200. Estimate the year in which the species might be first labelled "under threat". [2]

$$\frac{1}{2} < e^{-0.0525(t)}$$

$$t > 13.19$$

In Yr 2023



- 2 It is given that $f(x) = x^3 + ax^2 - 3x + b$, where a and b are constants, has a factor of $x+2$ and leaves a remainder of 30 when divided by $x-3$.

(a) Find the values of a and b .

[4]

By factor theorem $f(-2) = 0$

$$-8 + 4a + 6 + b = 0$$

$$4a + b = 2 \quad \text{--- (1)}$$

By remainder theorem $f(3) = 30$

$$27 + 9a - 9 + b = 30$$

$$9a + b = 12 \quad \text{--- (2)}$$

solving (1) & (2) $5a = 10$

$$a = 2$$

$$b = -6$$

- (b) Using these values of a and b , factorise $f(x)$ completely into three linear factors, using surds where necessary.

[3]

$$(x^3 + 2x^2 - 3x - 6) = (x+2)(x^2 + Ax - 3)$$

compare coefficient of x^2 : $2 = A + 2$

$$A = 0$$

$$(x^3 + 2x^2 - 3x - 6) = (x+2)(x-\sqrt{3})(x+\sqrt{3}) //$$



- 3 (a) Prove the identity $\tan 2\theta(2 \cos \theta - \sec \theta) = 2 \sin \theta$.

[4]

$$\begin{aligned}
 \text{LHS: } & \frac{2 \tan \theta}{1 - \tan^2 \theta} \left(2 \cos \theta - \frac{1}{\cos \theta} \right) \\
 &= \frac{\frac{2 \sin \theta}{\cos \theta}}{\frac{\cos^2 \theta - \sin^2 \theta}{\cos^2 \theta}} \left(\frac{2 \cos^2 \theta - 1}{\cos \theta} \right) \\
 &= \frac{2 \sin \theta \cos \theta}{\cos^2 \theta - \sin^2 \theta} \left(\frac{2 \cos^2 \theta - 1}{\cos \theta} \right) \\
 &= 2 \sin \theta \left(\frac{2 \cos^2 \theta - 1}{\cos^2 \theta - \sin^2 \theta} \right) \\
 &= 2 \sin \theta
 \end{aligned}$$

- (b) Hence solve the equation $\tan 2\theta(2 \cos \theta - \sec \theta) = \frac{1}{2} \sec \theta$ for $0^\circ \leq \theta \leq 360^\circ$.

[4]

$$\Rightarrow 2 \sin \theta = \frac{1}{2} \sec \theta$$

$$4 \sin \theta \cos \theta = 1$$

$$2 \sin 2\theta = 1$$

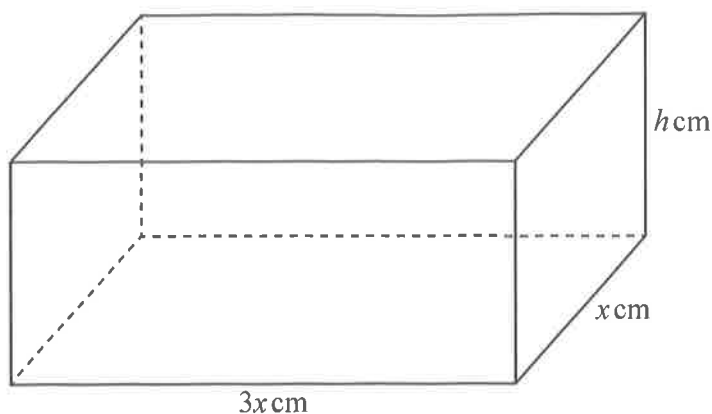
$$\sin 2\theta = \frac{1}{2}$$

$$2\theta = 30^\circ$$

$$2\theta = 30^\circ, 150^\circ, 210^\circ, 330^\circ$$

$$\theta = 15^\circ, 75^\circ, 105^\circ, 165^\circ$$





The diagram shows a closed food container designed in the shape of a cuboid. The rectangular base has dimensions of $x \text{ cm}$ and $3x \text{ cm}$. The height of the container is $h \text{ cm}$. The volume of the container is 2000 cm^3 .

- (a) Show that the total surface area of the six faces of the container is $6x^2 + \frac{16000}{3x}$. [4]

$$3x^2 h = 2000$$

$$h = \frac{2000}{3x^2}$$

$$\text{S.A.} : 6x^2 + 2xh + 6xh$$

$$= 6x^2 + 8x \left(\frac{2000}{3x^2} \right)$$

$$= 6x^2 + \frac{16000}{3x}$$



- (b) Given that x can vary, find the value of x for which the total surface area is stationary.

[4]

$$A = 6x^2 + \frac{16000}{3x}$$

$$\frac{dA}{dx} = 12x - \frac{16000}{3}x^{-2}$$

$$\text{When } \frac{dA}{dx} = 0 \quad 12x = \frac{16000}{3x^2}$$

$$x^3 = \frac{4000}{9}$$

$$x = 7.6314$$

$$\approx 7.63$$

- (c) Determine whether this value of x gives a maximum or minimum value for the total surface area of the container.

[2]

$$\frac{dA}{dx} = 12x - \frac{16000}{3}x^{-2}$$

$$\frac{d^2A}{dx^2} = 12 + \frac{32000}{3x^3}$$

$$\left. \frac{d^2A}{dx^2} \right|_{x=7.63} > 0 \quad \therefore A \text{ is minimum}$$



5 A calculator must not be used in this question.

(a) Show that $\tan 75^\circ = 2 + \sqrt{3}$.

[4]

$$\text{LHS: } \tan(30^\circ + 45^\circ)$$

$$= \frac{\tan 30^\circ + \tan 45^\circ}{1 - \tan 30^\circ \tan 45^\circ}$$

$$= \frac{\frac{1}{\sqrt{3}} + 1}{1 - \frac{1}{\sqrt{3}}} = \frac{\frac{\sqrt{3} + 1}{\sqrt{3}}}{\frac{\sqrt{3} - 1}{\sqrt{3}}} = \frac{\sqrt{3} + 1}{\sqrt{3} - 1} \times \frac{\sqrt{3} + 1}{\sqrt{3} + 1}$$


$$= \frac{3 + 2\sqrt{3} + 1}{3 - 1}$$

$$= 2 + \sqrt{3} =$$



where trans**Form**ation begins

Solution served as a suggestion only



- (b) Use the result from part (a) to find an expression for $\sec^2 75^\circ$, in the form $a + b\sqrt{3}$ where a and b are integers. [2]

$$\begin{aligned}\sec^2 75^\circ &= 1 + \tan^2 75^\circ = (2 + \sqrt{3})^2 + 1 \\ &= 4 + 4\sqrt{3} + 3 + 1 \\ &= 8 + 4\sqrt{3}\end{aligned}$$

- (c) Hence express $\cos^2 75^\circ$ in the form $c + d\sqrt{3}$, where c and d are fractions. [2]

$$\begin{aligned}\cos^2 75^\circ &= \frac{1}{8 + 4\sqrt{3}} \times \frac{8 - 4\sqrt{3}}{8 - 4\sqrt{3}} \\ &= \frac{8 - 4\sqrt{3}}{64 - 16(3)} \\ &= \frac{8 - 4\sqrt{3}}{16} \\ &= \frac{1}{2} - \frac{1}{4}\sqrt{3}\end{aligned}$$



- 6 (a) Solve the equation $2^x + 4^{x-1} = 15$.

[5]

$$\text{let } 2^x = w$$

$$w + \frac{w^2}{4} = 15$$

$$w^2 + 4w - 60 = 0$$

$$(w + 10)(w - 6) = 0$$

$$w = -10 \quad \text{or} \quad 6$$

$$2^x = -10 \quad \text{or} \quad 2^x = 6$$


rej

$$x = \frac{\ln 6}{\ln 2} = 2.58$$



where transformAtion begins

Solution served as a suggestion only



(b) The curve $y = 5 - e^{2x}$ intersects the x -axis at A and the y -axis at B .

(i) Find the coordinates of A and B , in logarithmic form where appropriate. [2]

when $x=0$

$$y = 4$$

$$B(0, 4)$$

when $y=0$

$$e^{2x} = 5$$

$$x = \frac{\ln 5}{2}$$

$$A\left(\frac{1}{2} \ln 5, 0\right)$$

(ii) Find the gradient of the curve at A . [2]

$$y = 5 - e^{2x}$$

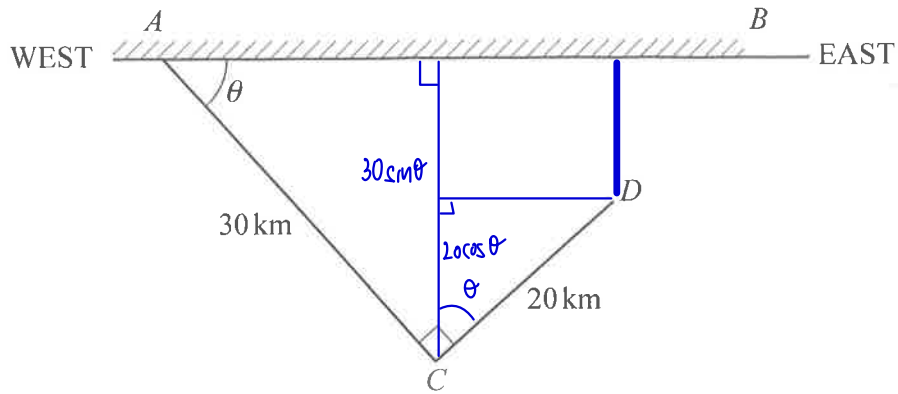
$$\frac{dy}{dx} = -2e^{2x}$$

$$\frac{dy}{dx} \Big|_{x=\frac{1}{2} \ln 5} = -2e^{2\left(\frac{1}{2} \ln 5\right)}$$

$$= -2e^{\ln 5}$$

$$= -10$$





Two countries are separated by a border that runs from west to east. Villages A and B lie on the border. A helicopter flies 30 km from village A to a village C . Angle BAC is θ° . The helicopter then travels 20 km to a village D at an angle of 90° to AC as shown. You can assume that the helicopter always flies at the same height.

- (a) Show that the shortest distance of village D from the border is $(30 \sin \theta - 20 \cos \theta)$ km. [3]

see diagram .



(b) Express $30 \sin \theta - 20 \cos \theta$ in the form $R \sin(\theta - \alpha)$ where $R > 0$ and $0^\circ \leq \alpha \leq 90^\circ$.

[4]

$$\begin{aligned}
 &= R \sin \theta \cos \alpha - R \cos \theta \sin \alpha \\
 &= (R \cos \alpha) \sin \theta - (R \sin \alpha) \cos \theta \\
 \left. \begin{aligned} 30 &= R \cos \alpha \\ 20 &= R \sin \alpha \end{aligned} \right\} \tan \alpha &= \frac{2}{3} \\
 &\alpha = 33.7^\circ \\
 R &= \sqrt{20^2 + 30^2} = 10\sqrt{13}
 \end{aligned}$$

$$\therefore 30 \sin \theta - 20 \cos \theta = 10\sqrt{13} \sin(\theta - 33.7^\circ)$$

(c) Find the value of θ if village D is 10 km from the border.

[2]

$$\begin{aligned}
 \sin(\theta - 33.7^\circ) &= \frac{1}{\sqrt{13}} \\
 \alpha &= 16.1 \\
 \theta - 33.7^\circ &= 16.1^\circ \\
 \theta &= 49.8^\circ
 \end{aligned}$$



8 The equation of a curve is $y = (x-3)\sqrt{2x+1}$.

(a) Show that $\frac{dy}{dx} = \frac{3x-2}{\sqrt{2x+1}}$.

[4]

$$\begin{aligned}\frac{dy}{dx} &= \sqrt{2x+1} + \frac{1}{2}(2x+1)^{-\frac{1}{2}}(2)(x-3) \\ &= \frac{2x+1 + x-3}{(2x+1)^{\frac{1}{2}}} \\ &= \frac{3x-2}{\sqrt{2x+1}}\end{aligned}$$

(b) A particle moves along the curve in such a way that the x -coordinate is increasing at a constant rate of 0.15 units per second. Find the rate of change of the y -coordinate at the point where $x = 4$. [2]

$$\begin{aligned}\frac{dx}{dt} &= 0.15 \\ \frac{dy}{dx}\bigg|_{x=4} &= \frac{3(4)-2}{\sqrt{2(4)+1}} = \frac{10}{3} \\ \frac{dy}{dt} &= \frac{dy}{dx} \cdot \frac{dx}{dt} \\ &= \frac{10}{3} \cdot \frac{15}{100} \\ &= \frac{1}{2} \text{ units/s}\end{aligned}$$



(c) Use the result from part (a) to evaluate $\int_0^4 \frac{x}{\sqrt{2x+1}} dx$.

[4]

$$\int_0^4 \frac{3x-2}{\sqrt{2x+1}} dx = [(x-3)\sqrt{2x+1}]_0^4$$

$$\int_0^4 \frac{3x}{\sqrt{2x+1}} dx - \int_0^4 \frac{2}{\sqrt{2x+1}} dx = [3 - (-3)(1)]$$


$$3 \int_0^4 \frac{x}{\sqrt{2x+1}} dx = 6 + [2(2x+1)^{1/2}]_0^4$$

$$\begin{aligned} \int_0^4 \frac{x}{\sqrt{2x+1}} dx &= \frac{6 + (6-2)}{3} \\ &= \frac{10}{3} \end{aligned}$$



where transformAtion begins

Solution served as a suggestion only



9 The equation of a circle is $x^2 + y^2 - 16x - 2y + 40 = 0$.

(a) Find the radius and coordinates of the centre of the circle.

[4]

$$(x-8)^2 + (y-1)^2 - 25 = 0$$

centre (8, 1) radius : 5



- (b) Find the shortest distance of the centre of the circle from the line $y = 2x$ and hence explain why the circle does not intersect the line $y = 2x$. [5]

$$\begin{aligned} \text{Eq.}^n \text{ of normal } & y - 1 = -\frac{1}{2}(x - 8) \\ & y = -\frac{1}{2}x + 5 \\ & y = 2x \end{aligned} \quad \left. \vphantom{\begin{aligned} \text{Eq.}^n \text{ of normal } \\ y - 1 = -\frac{1}{2}(x - 8) \\ y = -\frac{1}{2}x + 5 \\ y = 2x \end{aligned}} \right\} \text{ solving } \begin{aligned} \frac{5}{2}x &= 5 \\ x &= 2 \\ y &= 4 \end{aligned}$$

$$\begin{aligned} \text{Req. Dist} &: \sqrt{(8-2)^2 + (4-1)^2} \\ &= \sqrt{45} = 6.708 \approx 6.71 > 5 = \text{radius} \end{aligned}$$

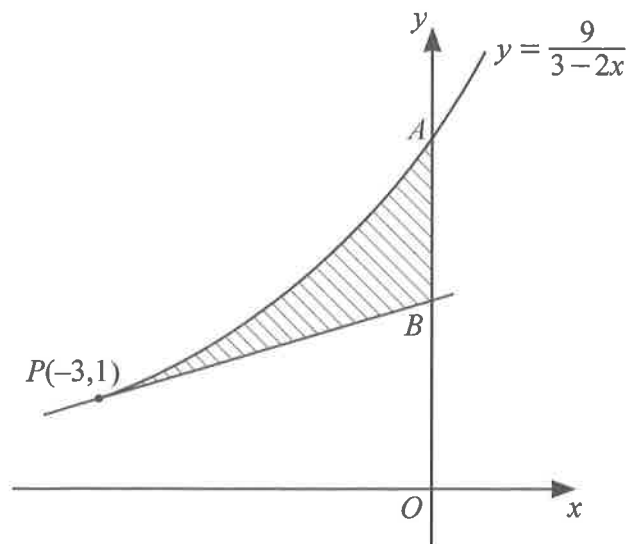
\therefore line $y=2x$ does not cut circle

The point $C(11, 5)$ lies on the circle and CD is a diameter of the circle.

- (c) Find the coordinates of D . [2]

$$\begin{aligned} \text{let } D \text{ be } & (x, y) \\ \frac{x+11}{2} &= 8 & \frac{y+5}{2} &= 1 \\ x &= 5 & y &= -3 \\ \therefore D & (5, -3) \end{aligned}$$





The diagram shows part of the curve $y = \frac{9}{3-2x}$ and the tangent to the curve at the point $P(-3, 1)$. The curve intersects the y-axis at A and the tangent intersects the y-axis at B .

- (a) Determine, with full working, whether B is nearer to O or to A .

[6]

$$y = 9(3-2x)^{-1} \quad A(0, 3)$$

$$\begin{aligned} \frac{dy}{dx} &= -9(3-2x)^{-2}(-2) \\ &= \frac{18}{(3-2x)^2} \end{aligned}$$

$$\left. \frac{dy}{dx} \right|_{x=-3} = \frac{18}{(3-2(-3))^2} = \frac{2}{9}$$

$$\begin{aligned} \text{Eqn of tangent: } y-1 &= \frac{2}{9}(x+3) \\ y &= \frac{2}{9}x + \frac{5}{3} \quad \text{so } B(0, \frac{5}{3}) \quad \therefore \text{ closer to } A. \end{aligned}$$




- (b) Find, showing all necessary working, the value of the constants a and b for which the area of the shaded region can be expressed as $a \ln 3 + b$. [6]

$$\begin{aligned}
 & \int_{-3}^0 9(3-2x)^{-1} dx - \frac{1}{2} \left(\frac{5}{3} + 1 \right) (3) \\
 &= \left[-\frac{9}{2} \ln |3-2x| \right]_{-3}^0 - 4 \\
 &= -\frac{9}{2} \ln 3 - \left(-\frac{9}{2} \ln 9 \right) - 4 \\
 &= -\frac{9}{2} \ln 3 + \frac{9}{2} \ln 9 - 4 \\
 &= \frac{9}{2} \ln 3 - 4 \qquad a = \frac{9}{2} \quad b = -4
 \end{aligned}$$



where transFormAtion begins

Solution served as a suggestion only



BLANK PAGE



DO NOT WRITE IN THIS MARGIN

DO NOT WRITE IN THIS MARGIN

DO NOT WRITE IN THIS MARGIN

DO NOT WRITE IN THIS MARGIN

DO NOT WRITE IN THIS MARGIN

Permission to reproduce items where third-party owned material protected by copyright is included has been sought and cleared where possible. Every reasonable effort has been made by the publisher (UCLES) to trace copyright holders, but if any items requiring clearance have unwittingly been included, the publisher will be pleased to make amends at the earliest possible opportunity.

Cambridge Assessment International Education is part of Cambridge Assessment. Cambridge Assessment is the brand name of the University of Cambridge Local Examinations Syndicate (UCLES), which is a department of the University of Cambridge.

